

Time: 10 Minutes

Paper Math 5

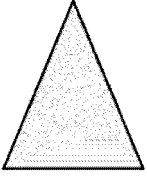
Total Marks: 10

5th Month, 3rd Week, 1st Day Syllabus: Unit 7: Exercise – 4 Q.No. 1. 2

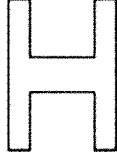
Q.No.1. Encircle the figures which have reflective symmetry. Also draw their line of symmetry: (10)

سوال نمبر 1: اُن اشکال پر دائرہ لگائیں جن کی ریفلیکٹیو سمٹری ہوتی ہے۔ سمٹری کی لائن بھی کھینچیں:

(a)



(b)



(c)



(d)




---

---

---

---

---

---

---

---

---

---

---

---

Time: 10 Minutes

Paper Math 5

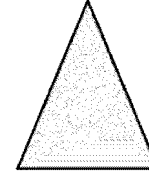
Total Marks: 10

5th Month, 3rd Week, 1st Day Syllabus: Unit 7: Exercise – 4 Q.No. 1. 2

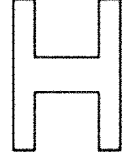
Q.No.1. Encircle the figures which have reflective symmetry. Also draw their line of symmetry: (10)

سوال نمبر 1: اُن اشکال پر دائرہ لگائیں جن کی ریفلیکٹیو سمٹری ہوتی ہے۔ سمٹری کی لائن بھی کھینچیں:

(a)



(b)



(c)



(d)




---

---

---

---

---

---

---

---

---

---

---

---